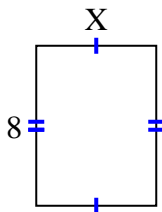


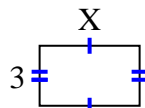


Find the value of X for each figure. Each figure is in centimeters (cm). Not to scale.

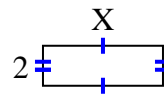
1) area =  $48 \text{ cm}^2$



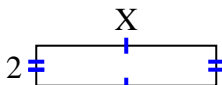
2) area =  $15 \text{ cm}^2$



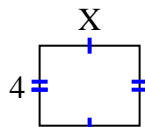
3) area =  $12 \text{ cm}^2$



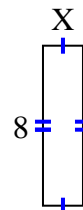
4) area =  $18 \text{ cm}^2$



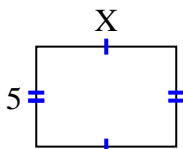
5) area =  $20 \text{ cm}^2$



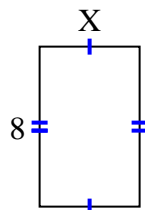
6) area =  $16 \text{ cm}^2$



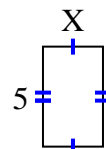
7) area =  $35 \text{ cm}^2$



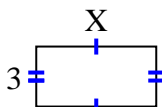
8) area =  $40 \text{ cm}^2$



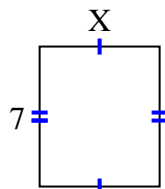
9) area =  $15 \text{ cm}^2$



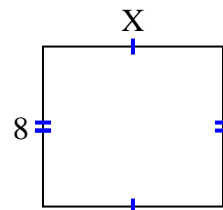
10) area =  $18 \text{ cm}^2$



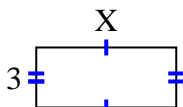
11) area =  $42 \text{ cm}^2$



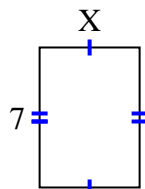
12) area =  $72 \text{ cm}^2$



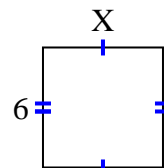
13) area =  $21 \text{ cm}^2$



14) area =  $35 \text{ cm}^2$



15) area =  $36 \text{ cm}^2$



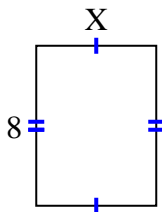
**Answers**

1. \_\_\_\_\_
2. \_\_\_\_\_
3. \_\_\_\_\_
4. \_\_\_\_\_
5. \_\_\_\_\_
6. \_\_\_\_\_
7. \_\_\_\_\_
8. \_\_\_\_\_
9. \_\_\_\_\_
10. \_\_\_\_\_
11. \_\_\_\_\_
12. \_\_\_\_\_
13. \_\_\_\_\_
14. \_\_\_\_\_
15. \_\_\_\_\_

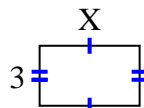


Find the value of X for each figure. Each figure is in centimeters (cm). Not to scale.

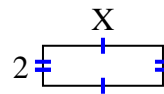
1) area =  $48 \text{ cm}^2$



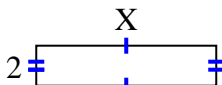
2) area =  $15 \text{ cm}^2$



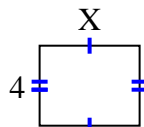
3) area =  $12 \text{ cm}^2$



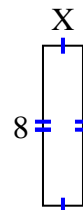
4) area =  $18 \text{ cm}^2$



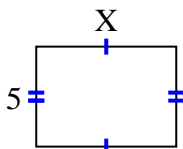
5) area =  $20 \text{ cm}^2$



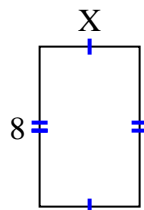
6) area =  $16 \text{ cm}^2$



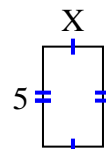
7) area =  $35 \text{ cm}^2$



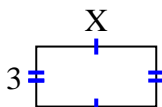
8) area =  $40 \text{ cm}^2$



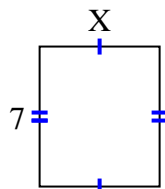
9) area =  $15 \text{ cm}^2$



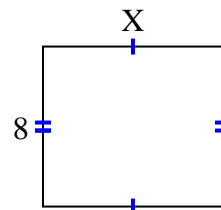
10) area =  $18 \text{ cm}^2$



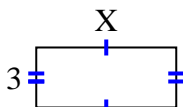
11) area =  $42 \text{ cm}^2$



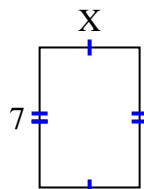
12) area =  $72 \text{ cm}^2$



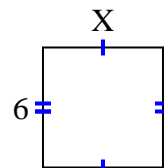
13) area =  $21 \text{ cm}^2$



14) area =  $35 \text{ cm}^2$



15) area =  $36 \text{ cm}^2$



Answers

1. 6

2. 5

3. 6

4. 9

5. 5

6. 2

7. 7

8. 5

9. 3

10. 6

11. 6

12. 9

13. 7

14. 5

15. 6